

Şekil Sayı Eşleştirme

→
= 8

△
= 4

+

○
= 6

◇
= 0

⬠
= 1

×

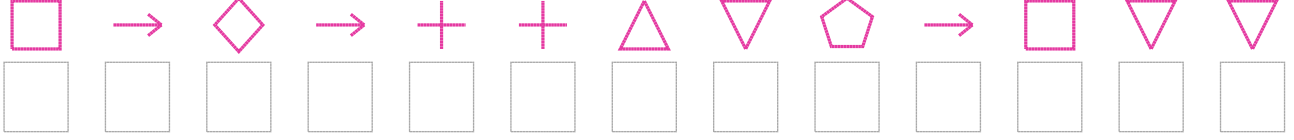
□
= 2

☆
= 7

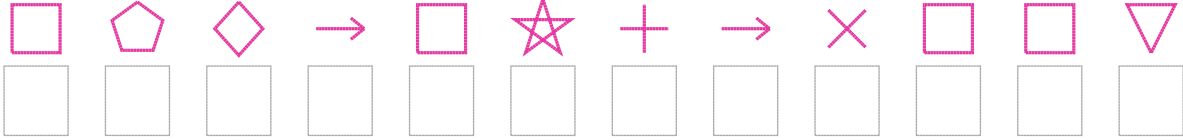
▽
= 3

Aşağıdaki uzun şifreleri hatasız çözerek altlarına yazın:

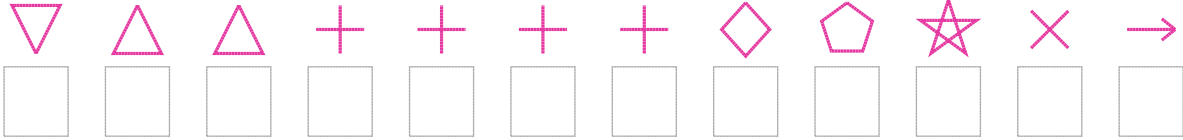
1. Şifre



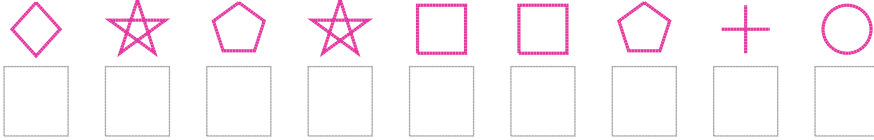
2. Şifre




3. Şifre



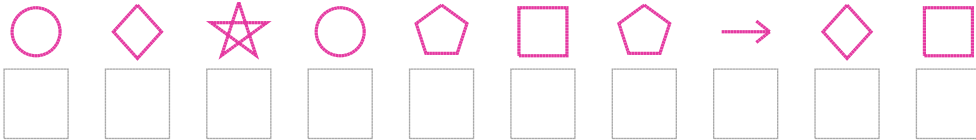
4. Şifre



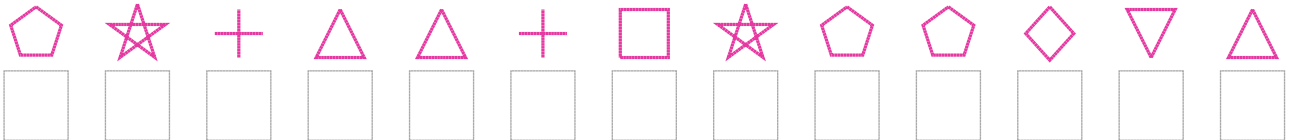
5. Şifre



6. Şifre



7. Şifre



□ BONUS: 6. ve 2. şifrenin üçüncü rakamının toplamı kaçtır?

Cevap Anahtarı

1. Şifre: 2808554318233

2. Şifre: 210827589223

3. Şifre: 344555501798

4. Şifre: 071722156

5. Şifre: 183374785

6. Şifre: 6076121802

7. Şifre: 1754452711034

□ Bonus Soru Cevabı: 7